

SSC CHSL- MODEL PAPER

ENGLISH COMPREHENSION

Q1.Directions: In these questions the sentences have been given in **Active/ Passive Voice**. From the given alternatives choose the one which best expresses the given sentence in Passive/Active Voice.

Did the noise frighten you ?

- (a) Did you frighten the noise ?
- (b) Was the noise frightened by you ?
- (c) Were you frightened by the noise ?
- (d) Were you frighten by the noise ?

Q2.Directions: In these questions the sentences have been given in **Active/ Passive Voice**. From the given alternatives choose the one which best expresses the given sentence in Passive/Active Voice.

They created such a fuss over a trivial matter.

- (a) Such a fuss is being created over a trivial matter.
- (b) Such a fuss was created over a trivial matter.
- (c) Such a fuss has been created over a trivial matter.
- (d) By them such a fuss has been created over a trivial matter.

Q3.Directions : In these questions choose the word opposite in meaning to the word given in bold.

CRITICISE

- (a) finish
- (b) recommend
- (c) commend
- (d) request

Q4.Directions : In these questions choose the word opposite in meaning to the word given in bold.

ZEAL

- (a) disinterest
- (b) apathy
- (c) carelessness
- (d) hatred

Q5.Directions: In the following questions, a sentence has been given in **Direct/Indirect Speech**. Out of the four alternatives suggested, select the one which best expresses the same sentence in Indirect/Direct Speech.

The Chief Minister said, "What a disaster the earthquake is"

- (a) The Chief Minister cried that the earthquake was a terrible disaster.
- (b) The Chief Minister expressed with surprise that the earthquake was a terrible disaster.
- (c) The Chief Minister exclaimed with sorrow that the earthquake was a terrible disaster.
- (d) The Chief Minister told in pain that the earthquake was a terrible disaster.

Q6.Directions: In the following questions, a sentence has been given in **Direct/Indirect Speech**. Out of the four alternatives suggested, select the one which best expresses the same sentence in Indirect/Direct Speech.

"There are ceremonies going on", he said to me.

- (a) He told me that there were ceremonies going on.
- (b) He told that there have been ceremonies going on.
- (c) He told that there had been ceremonies going on.
- (d) He told that there are ceremonies going on.

Q7. Directions : In each questions read each sentence to find out the whether there is **any error** in it. The error if any will be in one part of the sentence. The number of that part is the answer. Ignore the errors of punctuations if any.

It is I (1) /who is to blame (2) /for this bad situation(3) / No Error (4)

- (a) It is I
- (b) who is to blame
- (c) for this bad situation
- (d) No Error

Q8. Directions : In each questions read each sentence to find out the whether there is **any error** in it. The error if any will be in one part of the sentence. The number of that part is the answer. Ignore the errors of punctuations if any.

Bacon the father of the English essay (1)/ had a thirst (2)/ of knowledge (3)/ No error (4)

- (a) Bacon the father of the English essay
- (b) had a thirst
- (c) of knowledge
- (d) No error

Q9. My book is the new one _____ is the tom one

- (a) your
- (b) the book of you
- (c) yours
- (d) the book your

Q10. The farmer had _____ land and many servants

- (a) very little
- (b) some
- (c) a lot of
- (d) many

Q11.Directions: In the following questions, four alternatives are given for the **Idiom/Phrase** printed in bold in the sentence. Choose the alternative which best expresses the meaning of the Idiom/ Phrase.

I don't know why she has become stand-offish recently.

- (a) angry
- (b) hilarious
- (c) indifferent
- (d) unmanageable

Q12.Directions: In the following questions, four alternatives are given for the **Idiom/Phrase** printed in



bold in the sentence. Choose the alternative which best expresses the meaning of the Idiom/ Phrase.

fits and starts

- (a) slowly
- (b) not regularly
- (c) continuously
- (d) quickly

Q13. Directions: Out of the four alternatives, choose the one which can be **substituted** for the given words/sentence.

The study of maps

- (a) Cartography
- (b) Geography
- (c) Geology
- (d) Atlas

Q14. Directions: Out of the four alternatives, choose the one which can be **substituted** for the given words/sentence.

Inability to sleep

- (a) Hysteria
- (b) Insomnia
- (c) Aphasia
- (d) Amnesia

Q15. Directions : In these questions, the first and last sentence of the passage are numbered 1 and 6. The rest of the passage is split into four parts and named P,Q,R,S. These four parts are not given in proper order. Read the sentences and find out which of the four combinations is correct.

1. The landscape
P.with Nature displaying
Q.here is awesome
R.that are seldom
S.a range of delights
6. seen together

- (a) PSRQ
- (b) QPSR
- (c) RSPQ
- (d) QRSP

Q16. Directions : In these questions, the first and last sentence of the passage are numbered 1 and 6. The rest of the passage is split into four parts and named P,Q,R,S. These four parts are not given in proper order. Read the sentences and find out which of the four combinations is correct.

1. The salmon fish pushed themselves
P.to return to their spawning grounds
Q.and fertilized them
R.but once they laid their eggs
S.to their limits
6. they died

- (a) SQPR
- (b) RSQP
- (c) SPRQ

(d) RPSQ

Q17.Directions: In the following questions, a sentence/ part of the sentence is printed in bold. Below are given alternatives which may **improve the bold part**. Choose the correct alternative. In case no improvement is needed, your answer is No Improvement.

We eat that we may live.

- (a) might
- (b) shall
- (c) should
- (d) No Improvement

Q18.Directions: In the following questions, a sentence/ part of the sentence is printed in bold. Below are given alternatives which may **improve the bold part**. Choose the correct alternative. In case no improvement is needed, your answer is No Improvement.

Covered with grease, the water did not seem unduly cold to the swimmer

- (a) As he was covered with grease, the water did not seem unduly cold to the swimmer.
- (b) As it was covered with grease, the water did not seem unduly cold to the swimmer.
- (c) As it was covered with water, the grease did not seem unduly cold to the swimmer.
- (d) No improvement

Q19.Directions: In the following questions out of the four alternatives, choose the one which best expresses, the meaning of the given word.

FIDELITY

- (a) affection
- (b) allegiance
- (c) accuracy
- (d) loyalty

Q20.Directions: In the following questions out of the four alternatives, choose the one which best expresses, the meaning of the given word.

RECIPIENTS

- (a) creators
- (b) donors
- (c) receivers
- (d) instigators

Q21.DIRECTIONS : YOU HAVE ONE BRIEF PASSAGE WITH LIVE QUESTIONS. READ THE PASSAGE CAREFULLY AND CHOOSE THE BEST ANSWER TO EACH QUESTION OUT OF THE FOUR ALTERNATIVES.

In the world have we made health an end in itself? We have forgotten that health is really a means to enable a person to do his work and do it well. A lot of modern medicine is concerned with promotion of good health. Many patients as well as many physicians pay very little attention to health but very much attention to health makes some people imagine that they are ill. Our great concern with health is shown by the medical columns in

newspaper the health articles in popular magazines and the popularity of the television programme and all those books on medicine. We talk about health all the time. Yet for the most only result is more people are with imaginary illnesses. The healthy man should not be wasting any time talking about health he should be using health for work the work he does and the work that good health makes possible.

Modern medicine is primarily concerned with

- (a) promotion of good health.
- (b) people suffering from imaginary illnesses.
- (c) people suffering from real illnesses.
- (d) increased efficiency in work

Q22. A healthy man should be concerned with

- (a) his work which good health makes possible.
- (b) looking after his health.
- (c) his health which makes work possible.
- (d) talking about health.

Q23. Talking about health all the time makes people

- (a) always suffer from imaginary illnesses.
- (b) sometimes suffer from imaginary illnesses.
- (c) rarely suffer from imaginary illnesses
- (d) often suffer from imaginary illnesses.

Q24. The passage suggests that

- (a) health is an end in itself.
- (b) health is a blessing.
- (c) health is only a means to an end.
- (d) we should not talk about health.

Q25. The passage tells us

- (a) how medicines should be manufactured.
- (b) what a healthy man should or should not do.
- (c) what the television programmes should be about.
- (d) how best to imagine illnesses.

NUMERICAL APTITUDE

Q26. How much water must be added to 100ml of 80 percent solution of boric acid to reduce it to a 50 percent solution?

- (a) 30ml
- (b) 40 ml
- (c) 50ml
- (d) 60 ml

Q27. A certain sum of money amounts to Rs. 2420 in 2 years and Rs. 2662 in 3 years at same rate of compound interest, compounded annually the rate of interest per annum is:

- (a) Rs. 6%
- (b) Rs. 8%
- (c) Rs. 9%
- (d) Rs. 10%

Q28. A man can swim 3 km/hr in still water . if the velocity of the stream is 2 km/hr the time taken by him to swim to place 18 km upstream and back is :

- (a) $28/3$ hr
- (b) 10 hr
- (c) 12 hr
- (d) $25/3$ hr

Q29. If PQRS is a rhombus and $\angle SPQ = 50^\circ$, then $\angle RSQ$ is:

- (a) 75°
- (b) 45°
- (c) 55°
- (d) 65°

Q30. Sum of two numbers is 384, HCF of the numbers is 48, The difference of the numbers is :

- (a) 100
- (b) 192
- (c) 288
- (d) 336

Q31. Two vessels A and B contain acid and water in the ratio 4:3 and 5:3 respectively. Then the ratio in which these mixtures to be mixed to obtain a new mixture in vessel C containing acid and water in the ratio 3:2 is

- (a) 5:8
- (b) 7:8
- (c) 7:5
- (d) 4 : 7

Q32. A and B started a business investing amounts in the ratio of 2 :

3. If A has an additional amount of Rs. 10,000, their ratio of investment would have been 3 : 2, The amount invested by A was :

- (a) Rs. 8,000
- (b) Rs. 12,000
- (c) Rs. 18,000
- (d) Rs. 20,000

Q33. Two pipes, P and Q can fill a cistern in 12 and 15 minutes respectively. Both are opened together, but at the end of 3 minutes, P is turned off. In how many more minutes will Q fill the cistern ?

- (a) 7 minutes
- (b) $15/2$ minutes
- (c) 8 minutes
- (d) $33/4$ minutes

Q34. The value of x in the equation

$$\tan^2 \frac{\pi}{4} - \cos^2 \frac{\pi}{3} = x \sin \frac{\pi}{4} \cos \frac{\pi}{4} \tan \frac{\pi}{3} \text{ is :}$$

- (a) $3\sqrt{3}/4$
- (b) $2/\sqrt{3}$
- (c) $1/\sqrt{3}$
- (d) $\sqrt{3}/2$

Q35. The simplified value of

$$\sqrt{[5 + \sqrt{\{11 + \sqrt{(19 + \sqrt{(29 + \sqrt{49})})}]}]}$$
 is:



- (a) 3
- (b) 2
- (c) 4
- (d) 6

Q36. $\sqrt{12 + \sqrt{12 + \sqrt{12 + \dots}}}$ is equal to

- (a) 3
- (b) 4
- (c) 6
- (d) 2

Q37. A car covers four successive 7 km distances at speed of 10 km/hour, 20 km/hr, 30 km/hour, 60 km/hour respectively. Its average speed over this distance is

- (a) 30 km/hour
- (b) 60 km/hour
- (c) 40 km/hour
- (d) 20 km/hour

Q38. If $\frac{5x}{2x^2 + 5x + 1} = \frac{1}{3}$, then the value of $(x + \frac{1}{2x})$:

- (a) 15
- (b) 10
- (c) 20
- (d) 5

Q39. A certain sum of money becomes three times of itself in 20 years at simple interest. In how years does it become double of itself at the same rate of simple interest ?

- (a) 8 years
- (b) 10 years
- (c) 12 years
- (d) 14 years

Q40. The ratio of number of balls in bags x, y is 2 :

3. Five balls are taken from bag y and are dropped in bag number of balls are equal in each bag now, Number of balls in each bag now is:

- (a) 45
- (b) 20
- (c) 30
- (d) 25

Q41. Two men undertook to do a job for Rs. 14

00. One of them can do it alone in 7 days and the other in 8 days. With the assistance of a boy they together completed the work in 3 days. How much money will the boy get?

- (a) Rs. 300
- (b) Rs. 325
- (c) Rs. 275
- (d) Rs. 250

Q42. A sells an article to B making a profit of $\frac{1}{5}$ of his outlay. B sells it to C, gaining 20%. If C sells it for Rs. 600

and incurs a loss of $\frac{1}{6}$ of his Outlay, the cost price of A is

- (a) Rs. 600
- (b) Rs. 500
- (c) Rs. 720
- (d) Rs. 800

Q43. A cone of height 15 cm and base diameter 30 cm is carved out of a wooden sphere of radius 15 cm. The percentage of used wood is :

- (a) 75%
- (b) 50%
- (c) 40%
- (d) 25%

Q44. A, B, C and D the purchase a gift worth Rs. 60. A pays $\frac{1}{2}$ of what others are paying pays $\frac{1}{3}$ of what others are paying and C pays $\frac{1}{4}$ of what other are paying. what is the amount paid by D ?

- (a) 13
- (b) 15
- (c) 12
- (d) 14

Q45. During month long annual sale, a shopkeeper sells his goods at a discount of 50%, But in the last week, he offers an additional discount of 40%. If the original price of a shirt is Rs. x, then the price, (in rupees) during the last week of the sale will be

- (a) 90% of x
- (b) 70% of x
- (c) 30% of x
- (d) 10% of x

Q46. A solid metallic spherical ball of diameter 6cm is melted and recast into a cone with diameter of the base as 12cm. the height of the cone is:

- (a) 6cm
- (b) 2cm
- (c) 4cm
- (d) 3cm

Q47. If surface area and volume of a sphere are S and V respectively, then value of S^3/V^2 is

- (a) 36π units
- (b) 9π units
- (c) 18π units
- (d) 27π units

Q48. The value of $\frac{1}{\operatorname{cosec}\theta - \cot\theta} - \frac{1}{\sin\theta}$ is :

- (a) 1
- (b) $\cot\theta$
- (c) $\operatorname{cosec}\theta$
- (d) $\tan\theta$

Q49. The value of $152 (\sin 30^\circ + 2\cos^2 45^\circ + 3\sin 30^\circ + 4\cos^2 45^\circ + \dots + 17\sin 30^\circ + 18\cos^2 45^\circ)$ is :



- (a) an integer but not perfect square
- (b) a rational number but not an integer
- (c) a perfect square of an integer
- (d) irrational

Q50.The Government reduced the price of sugar by 10 per cent. By this a consumer can buy 6.2 kg more sugar for Rs 837 The reduced price per kg of sugar is

- (a) Rs. 12.50
- (b)Rs. 13.00
- (c) Rs. 13.50
- (d) Rs. 14.00

GENERAL INTELLIGENCE & REASONING

Q51.Direction: In each of the following questions, select the related word from the given alternatives.

Doctor : Stethoscope :: Sculptor : ?

- (a) Anvil
- (b) Chopper
- (c) Chisel
- (d) Trowel

Q52.Direction: From among the given alternatives select the one in which the set of numbers is most like the set of numbers given in the question.

Given set : (536, 428, 365)

- (a) 358
- (b)435
- (c)624
- (d)266

Q53.Direction: In each of the following questions, select the related letter from the given alternatives.

WRITE : JEVGR :: WRONG : ?

- (a)JEBAT
- (b) JECAT
- (c) JEDAT
- (d) JEDAD

Q54.A and B are brother and sister respectively. C is A's father, D is C's sister and E is D's mother. How is B related to E?

- (a)Grand-daughter
- (b)Great-grand-daughter
- (c)Aunt
- (d)Daughter

Q55.Direction: In The following Question you have to identify the correct response from the given premises stated according to following symbols:

If '×' means '-', '-' means '×', '+' means '÷' and '÷' means '+', then $(15 - 10) \div (130 + 10) \times 50 = ?$

- (a) 1800
- (b) 113
- (c) 2000
- (d) 123

Q56.Find the odd man out from the given responses ?

- (a) Newspaper
- (b) Press
- (c) Edition
- (d) Audition

Q57.Find the odd man out from the given responses ?

- (a) Enlarge
- (b) Expand
- (c) Increase
- (d) Unite

Q58.Find the odd man out from the given responses ?

- (a) Millet
- (b) Barley
- (c) Wheat
- (d) Green gram

Q59.Deepa starts walking northwards and after a while, she turns to her right. After walking some distance, she turns to her left and walks a distance of one kilometre. She then turns to her left again. In which **direction** is she moving now ?

- (a) North
- (b) West
- (c) East
- (d) South

Q60.Ram cycled 10 km southward from his home, turned right and cycled 6 km, turned right, cycled 10 km, turned left and cycled 15 km. How many km will he have cycled to reach straight home?

- (a) 16 km
- (b) 20 km
- (c) 10 km
- (d) 21km

Q61.Directions: In each of the following questions a series is given with one term missing. Choose the correct alternative from the given ones that will complete the series

7, 22, 37, ?, 67, 82

- (a) 40
- (b) 42
- (c) 52
- (d) 62

Q62.Directions: In each of the following questions a series is given with one term missing. Choose the correct alternative from the given ones that will complete the series

0, 6, 24, 60, ?

- (a)90
- (b) 120
- (c) 84
- (d) 72

Q63.Direction: The number of letters skipped in between adjacent letters in a series is 5. Which of the following series observes this rule ?

- (a) CIOUA
- (b) CINUA
- (c) CIOTA
- (d) CIOUZ

Q64.If MISTAKE is coded as 9765412 and NAKED is coded as 84123 how as INTIMATED coded as?

- (a) 89786145
- (b) 78579452
- (c) 79438163
- (d) 78698365

Q65.If HKUJ means FISH, what does UVCD mean ?

- (a) STAR
- (b) STAB
- (c) SEAL
- (d) STAR

Q66.If 'STYLE' is written as PQVIB, how can 'SMELL' be written in that code ?

- (a) PJBII
- (b) PVBII
- (c) PVHII
- (d) PJHII

Q67.Direction: In the following questions a word is followed by four other words one of which cannot be formed by using the letter of the given word. Find this word.

- PERMANENT
- (a) REMNANT
 - (b) TRAMP
 - (c) MENTOR
 - (d) AMPERE

Q68.Direction:In the following questions a word is followed by four other words one of which cannot be formed by using the letter of the given word. Find this word.

- TENDENTIOUS
- (a) INTENTION
 - (b) DENTIST
 - (c) TENT
 - (d) STUDENT

Q69.Name a single letter that can be suffixed to the following words to form new words ?

- HAT BAR BAT PIN BATH
- (a) A
 - (b) B
 - (c) D
 - (d) E

Q70.If 'STYLE' is written as PQVIB, how can 'SMELL' be written in that code ?

- (a) PJBII
- (b) PVBII
- (c) PVHII
- (d) PJHII

Q71.Directions : In each of the following questions a word is represented by only one set of numbers as given in anyone of the alternatives. The sets of numbers given in the alternative are represented by two classes of alphabets as in the 2 matrices given below. The column and rows of Matrix I are numbered from 0 to 4 and that of Matrix II from 5 to 9. A letter can be represented first by its row and next by column number. For example 'C' can be represented by 02, 21 etc. 'T' can be represented by 65, 96 etc. Similarly you have to identify the correct set for the word given in each question.

Matrix-I

	0	1	2	3	4
0	D	V	C	P	M
1	P	M	D	V	C
2	V	C	P	M	D
3	M	D	V	C	P
4	C	P	M	D	V

Matrix-II


	5	6	7	8	9
5	S	A	U	T	J
6	T	J	S	A	U
7	A	U	T	J	S
8	J	S	A	U	T
9	U	T	J	S	A

DUST

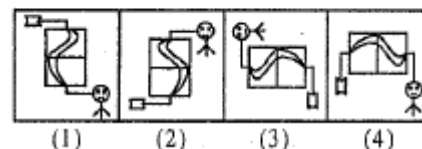
- (a) 00, 76, 86, 59
- (b) 13, 76, 98, 89
- (c) 21, 69, 55, 65
- (d) 12, 57, 67, 58

Q72.Directions: which of the answer figures is exactly the mirror image of the given figure?

Question Figure :



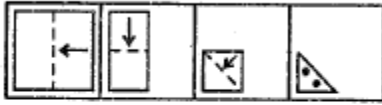
Answer Figures :



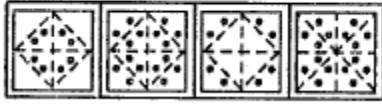
- (a) [1]
- (b) [2]
- (c) [3]
- (d) [4]

Q73.Directions: A piece of paper is folded and cut as shown below. How will it appear when opened? Select your response from the answer figures.

Question Figures :



Answer Figures :

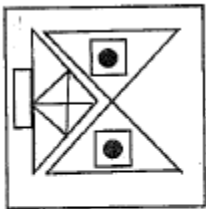


(1) (2) (3) (4)

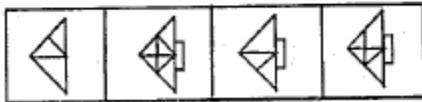
- (a)[1]
- (b)[2]
- (c)[3]
- (d)[4]

Q74.Directions: Which answer figure will complete the question figure?

Question Figure :



Answer Figures :



(1) (2) (3) (4)

- (a)[1]
- (b)[2]
- (c)[3]
- (d)[4]

Q75.Directions: In which answer figure is the given figure embedded?

Question Figure :



Answer Figures :



(1) (2) (3) (4)

- (a)[1]
- (b)[2]
- (c)[3]
- (d)[4]

GENERAL AWARENESS

Q76.Where is Tala Hydroelectric project which is expected to generate 1020MW power located ?

- (a)Arunachal Pradesh
- (b)Bhutan
- (c)Nepal
- (d)Himachal Pradesh

Q77.Which of the following is largely used in textile industries in India?

- (a)Cotton
- (b)Wool
- (c)Synthetic fibres
- (d)Jute

Q78.When did the British make English the medium of instruction in India ?

- (a)1813
- (b) 1833
- (c) 1835
- (d) 1844

Q79.The Reserve Bank of India issues currency notes under

- (a) fixed fiduciary system
- (b)maximum fiduciary system
- (c)minimum reserve system
- (d)proportional reserve system

Q80.Which of the following produces more severe bums ?

- (a)Boiling water
- (b)Hot water
- (c)Steam
- (d) Melting iceberg

Q81.Intensity of gravitational field of earth is maximum at

- (a)Poles
- (b)Equator
- (c) Centre of earth
- (d) Surface

Q82.Who certifies a Bill to be a Money Bill in India?

- (a) Finance Minister
- (b)President
- (c)Speaker of the Lok Sabha
- (d)Prime Minister

Q83.Under the Constitution the power to issue a right of Habeas Corpus is vested in

- (a)High Courts alone
- (b)Supreme Court alone
- (c)Both Supreme Court High Courts
- (d) All Courts down to the District Courts

Q84. Detergents used for cleaning clothes and utensils contain

- (a) nitrates



- (b) bicarbonates
- (c) sulphonates
- (d) bismuthates

Q85. The most abundant element in the human body is

- (a) carbon
- (b) iron
- (c) nitrogen
- (d) oxygen

Q86. A is an input device which is used for converting pictures maps and drawings into digital form for storage in computers ?

- (a) OCR
- (b) OMR
- (c) MICR
- (d) digitizer

Q87. The chemicals released by one species of animals in order to attract the other members of the same species are

- (a) Hormones
- (b) Nucleic acids
- (c) Pheromones
- (d) Steroids

Q88. The pigment involved in photosynthetic activity is

- (a) anthocyanin
- (b) fucoxanthin
- (c) carotenoid
- (d) chlorophyll

Q89. Which of the following is used to denature ethanol ?

- (a) Methyl alcohol
- (b) Propyl alcohol
- (c) Phenol
- (d) Methane

Q90. Which one of the following contributes largely to the greenhouse effect ?

- (a) Ozone
- (b) Carbon monoxide
- (c) Carbon dioxide
- (d) Water vapour

Q91. In nuclear reactor heavy water is used as

- (a) coolant
- (b) fuel
- (c) moderator
- (d) atomic smasher

Q92. An example of an anticoagulant drug is

- (a) Aspirin
- (b) Morphine
- (c) Penicillin
- (d) Streptomycin

Q93. Amphibians are facing unprecedented decline the world over. This has been attributed to

1. Considerable increase in amphibian predators
2. loss of habitat
3. fungal infections
4. global climate change

The correct response is:

- (a) 1 only
- (b) 2, 4
- (c) 1,3,4
- (d) 3,4

Q94. (a)

- (b)
- (c)
- (d)

Q95. the interim government at the centre was formed

- (a) after the visit of the Cripps Mission
- (b) before the visit of the Cripps Mission
- (c) after Lord Mountbatten came to India for transfer of power
- (d) after the visit of Cabinet Mission

Q96. In India, if a religious sect/community is given the status of a national minority, what special advantage it is entitled to?

1. It can establish and administer exclusive educational institutions.
2. The President of India automatically nominates a representative of the community to the Lok Sabha
3. It can derive benefits from the Prime Minister's 15-Point Programme.

Which of the statements given above is/are correct?

- (a) 1 only
- (b) 2 and 3 only
- (c) 1 and 3 only
- (d) 1,2 and 3

Q97. Consider the following statements:

1. Temperature in tropical Eastern Pacific is higher during an El Nino year.
2. Temperature in tropical central Pacific is higher during El Nino Modoki year.

Which of the above statements are true?

- (a) 1 only
- (b) 2 only
- (c) 1 and 2
- (d) Neither 1 nor 2

Q98. Our information regarding Alexander's invasion is derived from the account left by three of the following. Point the odd man out

- (a) Diodorus
- (b) Plutarch
- (c) Nearchus
- (d) Ctesias



Q99.The cross section of a stem of tree has fifty rings
what is the age of the tree ?
(a)50 months
(b) 5 years
(c) 25 years
(d) 50 years

Q100.Roundworm Is a human parasite found in the
(a) Small Intestine
(b) Liver
(c) Stomach
(d)Large intestine

- 1c 2b 3c 4b 5c 6a
- 7b 8c 9c 10c 11c 12b
- 13a 14b 15b 16c 17d 18a
- 19d 20c 21a 22a 23d 24a
- 25b 26d 27d 28c 29d 30c
- 31b 32a 33d 34d 35a 36b
- 37d 38d 39b 40d 41c 42b
- 43d 44a 45c 46d 47a 48b
- 49c 50c 51c 52d 53a 54a
- 55b 56d 57d 58a 59b 60d
- 61c 62b 63a 64b 65b 66a
- 67c 68a 69d 70a 71d 72a
- 73b 74b 75a 76b 77a 78c
- 79c 80c 81a 82c 83c 84c
- 85d 86d 87c 88d 89a 90d
- 91c 92a 93d 94d 95d 96c
- 97c 98d 99d 100d